

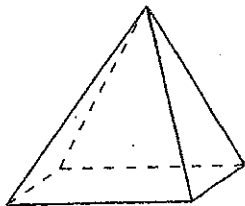
Geo Unit: Lesson 1-2a Review

NAME: _____

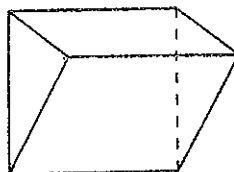
MATH: _____ DATE: _____

For each figure, NAME it and draw the net.

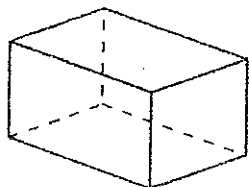
1.



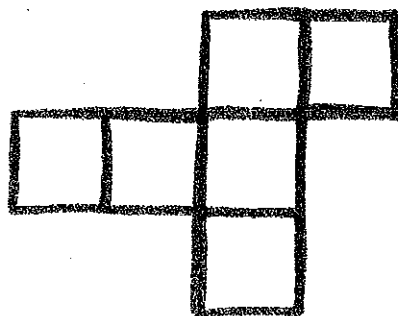
2.




3.



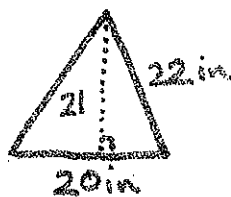
4. What figure will this net create?



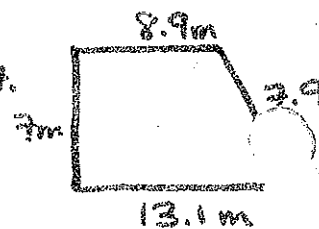
5.



6.



7.



Graph and find area.

$(-6, -8)$ $(-2, 4)$ $(8, -8)$

9. $(-6, 5)$ $(-2, 5)$ $(-2, 0)$
 $(4, 0)$ $(4, -3)$ $(-6, -3)$

